

Total Questions : 35

Time : 1 hr.

**Guidelines for the Candidate**

1. You will get additional ten minutes to fill up information about yourself on the OMR Sheet, before the start of the exam.
2. Write your **Name, School Code, Class, Section, Roll No.** and **Mobile Number** clearly on the **OMR Sheet** and do not forget to sign it. We will share your marks / result and other information related to SOF exams on your mobile number.
3. The Question Paper comprises four sections:  
**General Awareness** (20 Questions), **Current Affairs** (5 Questions), **Life Skills** (5 Questions) and **Achievers Section** (5 Questions).  
Each question in Achievers Section carries 2 marks, whereas all other questions carry 1 mark each.
4. All questions are compulsory. There is no negative marking. Use of calculator is not permitted.
5. There is only ONE correct answer. Choose only ONE option for an answer.
6. To mark your choice of answers by darkening the circles on the OMR Sheet, use **HB Pencil** or **Blue / Black ball point pen** only.  
E.g.

**Q.10 : What would you keep in an aquarium?**

- A. Cats                      B. Dogs                      C. Fish                      D. Cows

As the correct answer is option C, you must darken the circle corresponding to option C on the OMR Sheet.

10. (A) (B) ● (D)

7. Rough work should be done in the blank space provided in this booklet.
8. Return the OMR Sheet to the invigilator at the end of the exam.
9. Please fill in your personal details in the space provided before attempting the paper.



**DO NOT OPEN THIS BOOKLET UNTIL ASKED TO DO SO**

Name:.....

SOF Olympiad Roll No.:..... Contact No.:.....

**1** 'The Statue of Unity' is the tallest statue in the world. In which Indian state is it located?

- A. Maharashtra
- B. Gujarat
- C. Uttarakhand
- D. Odisha



**2** What is the name of our closest star?

- A. Pole star
- B. Sirius
- C. Sun
- D. Alpha Centauri

**3** Which of the following tools would a carpenter use?



**4** Which of the following words goes with the word 'salt'?

- A. Sugar
- B. Pepper
- C. Butter
- D. Sweet

**5** Which natural disaster is caused by hot dry weather and no rain?

- A. Tornado
- B. Hurricane
- C. Floods
- D. Drought

**6** You are packing for a trip to a snowy place. Which of the following items should you avoid?



Woollen socks



Jacket



Cotton frock



Woollen cap

**7** In the story 'Snow White and the Seven Dwarfs', Snow White was poisoned using a \_\_\_\_\_.

- A. Poisoned apple
- B. Poisoned candy
- C. Poisoned glass of water
- D. Poisoned bread

**8** The machine shown in the given picture helps to pick up dust and dirt. Identify it and select the correct option.

- A. Dishwasher
- B. Vacuum cleaner
- C. Hair dryer
- D. Hand blender



**9** Sachin Tendulkar is associated with which of the following sports?

A.



B.



C.



D.



**10** Who among the following is a family member?

- A. Neighbour
- B. Friend
- C. Sister
- D. Teacher

**11** The word 'bark' has two different meanings. One is 'a dog's sound' and the other is \_\_\_\_\_.

- A. To bend forward
- B. A weapon used in war
- C. Hard outer covering of a tree
- D. Not heavy

**12** Five rings in the Olympic flag represent \_\_\_\_\_.

- A. Five oceans
- B. Five continents
- C. First five countries to participate in the games
- D. None of these

- 13** The famous person shown in the given picture was the first black President of South Africa. Identify him and select the correct option.

A. Martin Luther King Jr.  
B. Nelson Mandela  
C. Barack Obama  
D. Abraham Lincoln



- 14** Which vegetable is used to make 'French Fries'?




- 15** What covers most of the Earth's surface?

A. Land                      B. Forests                      C. Oceans                      D. Mountains

- 16** Which of the following can be used to make doors and furniture?

A. Rubber                      B. Wood                      C. Leather                      D. Paper

- 17** Which of the following is a flightless bird?



D. All of these

- 18** What is the name of the playground/field used for tennis?

A. Pitch                      B. Court                      C. Rink                      D. Ring

- 19** Identify the following.

- It is a type of computer.
- It requires a separate CPU cabinet.



- 20** Which of the following objects can roll but not slide?



## CURRENT AFFAIRS

**21** Who among the following is the current President of China?



Xi Jinping



Moon Jae-in



Fumio Kishida

D. None of these

**22** Identify the sportsperson shown in the given picture.

- A. Rohit Sharma
- B. Virat Kohli
- C. KL Rahul
- D. Kuldeep Yadav



**23** When is the Independence Day celebrated in India every year?

- A. 11<sup>th</sup> August
- B. 15<sup>th</sup> January
- C. 26<sup>th</sup> January
- D. 15<sup>th</sup> August

**24** What is the colour of latest currency note of ₹10 in India?

- A. Magenta
- B. Stone grey
- C. Green
- D. Chocolate brown

**25** Who is the current Chief Minister of Delhi?



Rekha Gupta



Arvind Kejriwal



Yogi Adityanath

D. None of these

## LIFE SKILLS

**26** What should you do if you are on the swing and there are other kids waiting for their turn on the swing?

- A. Tell them to use the slide instead and take your own time.
- B. Enjoy the swing as long as you want and ignore them.
- C. Finish your turn quickly and let other kids take their turn.
- D. Jump off right away even if you just got on.

**27** You want to borrow a pencil from a friend. What would you do?

- A. Take it from his pencil box without asking.
  - B. Politely ask, "Can I borrow your pencil please?"
  - C. Order him to give you his pencil.
  - D. None of these
- 

**28** Before going to bed at night, you should

- A. Play video games
  - B. Watch TV
  - C. Brush your teeth
  - D. Wear your school uniform.
- 

**29** What should you do if you accidentally drop food on the dining table while eating?

- A. Pick it and throw it under the table.
  - B. Ask the person eating next to you to clean it up.
  - C. Pretend as though you didn't see it.
  - D. Clean it up using a napkin and throw it in the bin.
- 

**30** Which of the following pictures represents a good habit?



## ACHIEVERS SECTION

**31** Select the INCORRECT match.

- |                                  |   |               |
|----------------------------------|---|---------------|
| 1. Highest mountain in the world | – | Mount Elbrus  |
| 2. Largest ocean in the world    | – | Pacific Ocean |
| 3. Largest island in the world   | – | Sumatra       |
| 4. Longest river in the world    | – | Nile          |

- A. 2 only                      B. 4 only                      C. 1 and 2 only                      D. 1 and 3 only
- 

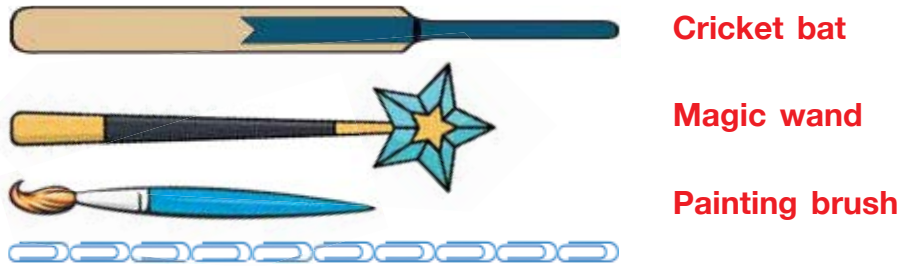
**32** Rearrange the given letters to find the word which refers to 'a sound made by dry leaves when they are rubbing against each other'.

- A. TURSEL                      B. RABLE                      C. RATHTES                      D. TEBA

- 33** Read the given statement and select the option that correctly identifies 1, 2 and 3.  
1 made history for India at 2 Olympics 2020 by winning the Olympic gold medal in 3.

1	2	3
A. Abhinav Bindra	Paris	Shooting
B. Neeraj Chopra	Tokyo	Javelin throw
C. Sushil Kumar	Tokyo	Wrestling
D. PV Sindhu	Paris	Badminton

- 34** Observe the given picture carefully and fill in the blanks.






(p) The length of painting brush is \_\_\_\_\_ shorter than the length of cricket bat.

(q) The total length of cricket bat and magic wand is \_\_\_\_\_.


(p)	(q)
A. 4	18
B. 5	10
C. 5	18
D. 4	12


- 35** Match the image given in column-1 with its correct name given in column-2 and select the correct option.

Column-1	Column-2
(a) 	(1) UPS
(b) 	(2) Monitor
(c) 	(3) CPU

- A. (a)-(1), (b)-(2), (c)-(3)      B. (a)-(2), (b)-(3), (c)-(1)
- C. (a)-(3), (b)-(2), (c)-(1)      D. (a)-(2), (b)-(1), (c)-(3)

SPACE FOR ROUGH WORK



For latest updates & information, please like  our Facebook page ([www.facebook.com/sofworld](http://www.facebook.com/sofworld)) or register on [www.sofworld.org/subscribe-updates.html](http://www.sofworld.org/subscribe-updates.html)

For Level 1 and Level 2 preparation material / free sample papers, please log on to **[www.mtg.in](http://www.mtg.in)**



**Head Office:** Plot 99, Sector 44 Institutional area, Gurugram -122 003 (HR), India  
Email: [info@sofworld.org](mailto:info@sofworld.org) | Website: [www.sofworld.org](http://www.sofworld.org)